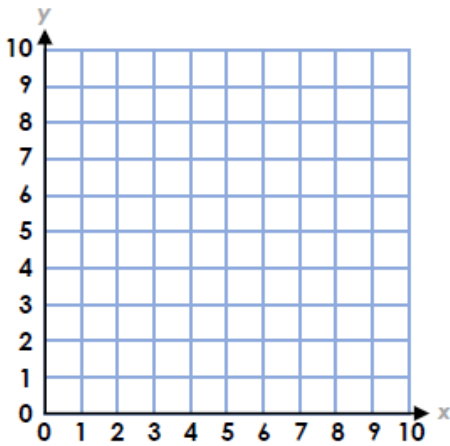


4a. Plot the points for the coordinates on the grid below.

(5, 1)

(1, 4)

(7, 2)



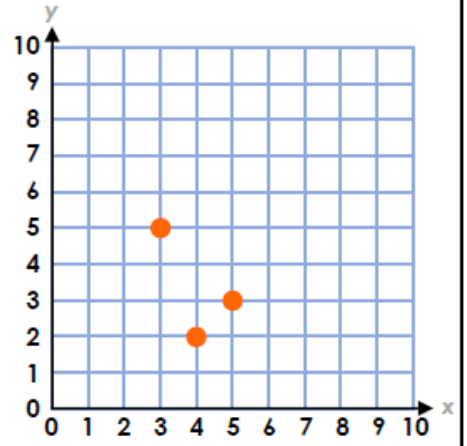
VF

4a. Isobel is plotting coordinates. Explain her mistake.

(2, 4)

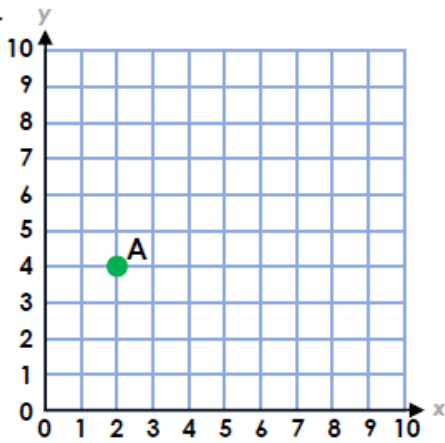
(3, 5)

(5, 3)



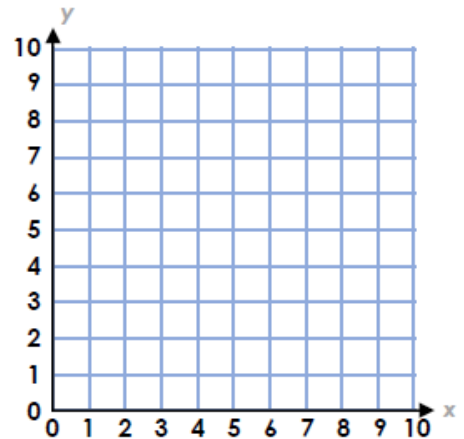
R

5a. Draw a right-angled triangle on the grid. Start at point A. Write the coordinates.



VF

5a. Identify and plot six pairs of coordinates, each with a total of less than 10.



PS

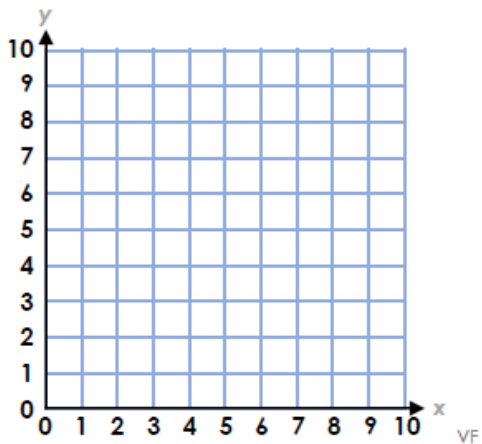
6a. True or false? These are the coordinates for the vertices of a square.

(1, 1)

(1, 4)

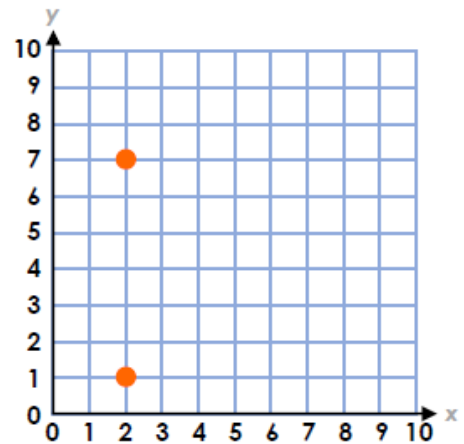
(3, 4)

(3, 1)



VF

6a. Plot 2 missing coordinates to make a letter made up of straight lines.



PS