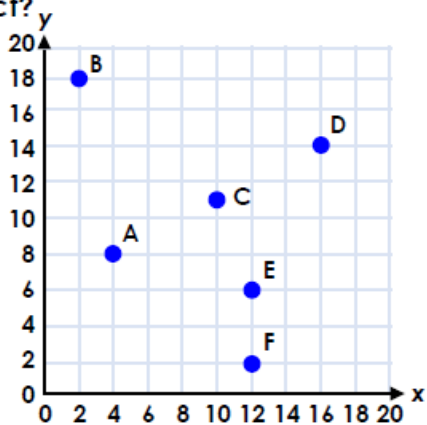


7a. Are the coordinates of each point correct?

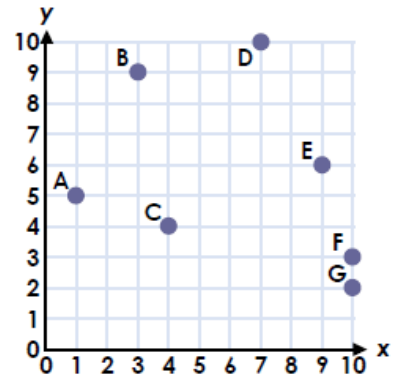


A = (8, 4) B = (2, 18) C = (10, 12)
 D = (15, 15) E = (7, 12) F = (12, 2)



VF

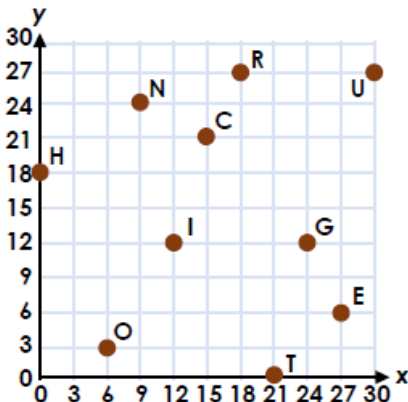
7a. I'm thinking of a coordinate. The value of x is between 3 and 6 and the value of y is between 1 and 6. Which coordinate could it be? Explain your answer.



R

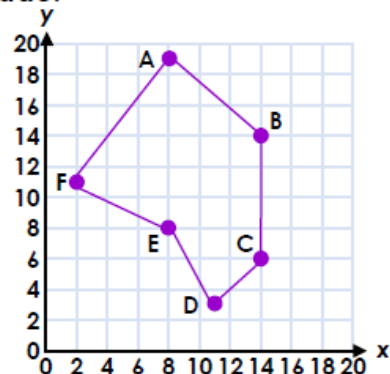
8a. Find the coordinates in order. What word do the letters spell?

(27, 6) (9, 24) (6, 3) (30, 27) (24, 12) (0, 18)



VF

8a. Sally has written the coordinates for a hexagon. Correct any mistakes she has made.

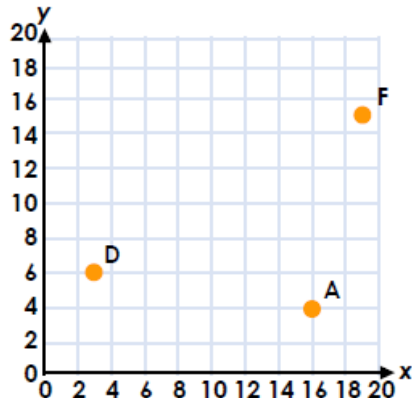


PS

A = (8, 18) B = (14, 14) C = (6, 14)
 D = (3, 11) E = (8, 8) F = (2, 11)

9a. Complete the coordinates below and plot any missing points on the grid.

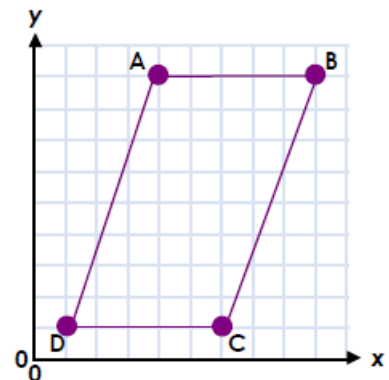
A = (,) B = (8, 13) C = (2, 19)
 D = (,) E = (17, 16) F = (,)



VF

9a. B = (45, 45) D = (5, 5)

Use this information to work out the coordinates of points A and C.



PS